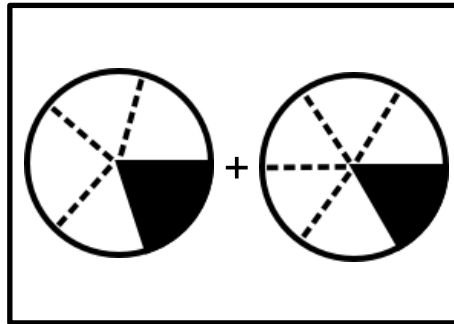
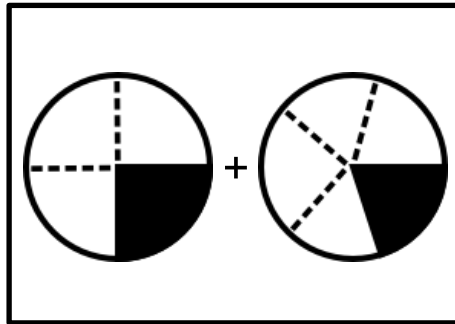
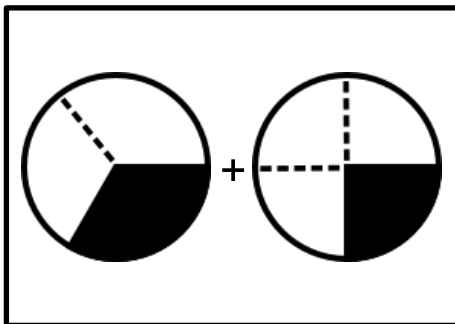
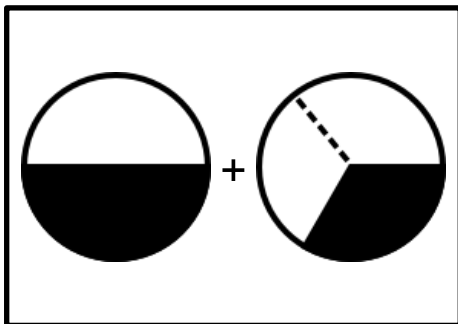


$$\frac{3}{4}$$

$$\frac{1}{2}$$

$$\frac{3}{8}$$

$$\frac{3}{10}$$



$$\frac{5}{6}$$

$$\frac{7}{12}$$

$$\frac{9}{20}$$

$$\frac{11}{30}$$